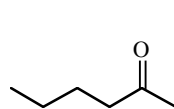
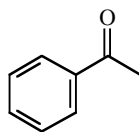


Chemistry 250 -- Practice IR Problems

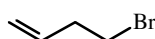
Indicate which one of the following 6 compounds corresponds to each of the IR spectra shown below.
Indicate the important absorptions that allowed you to make the assignment.



A



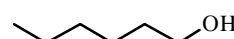
B



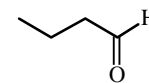
C



D



E



F

